



Sous chaque grille figure un nombre. Ecris-le sous la forme d'une fraction, puis colorie l'aire correspondante du quadrillage.

**A**



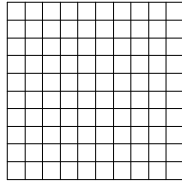
**0,250**

**B**



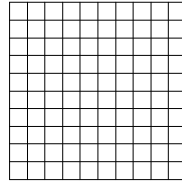
**0,625**

**C**



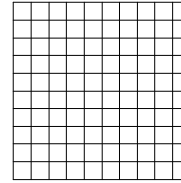
**0,500**

**D**




**0,375**

**E**




**0,125**

**F**




**0,52**

**G**



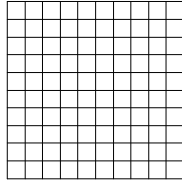
**0,2**

**H**



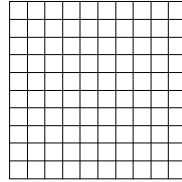
**0,40**

**I**




**0,600**

**J**




**0,8**

**K**




**0,12**

**L**




**0,24**

**M**



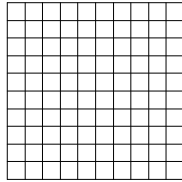
**0,05**

**N**



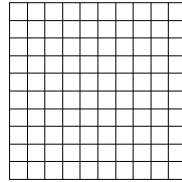
**0,01**

**O**



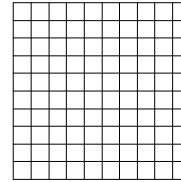
**0,005**

**P**




**0,0025**

**Q**



**0,00**

**R**



**5 : 100**


Sous chaque grille figure un nombre. Ecris-le sous la forme d'une fraction, puis colorie l'aire correspondante du quadrillage.

**A**




**0,250**

**B**




**0,625**

**C**




**0,500**

**D**




**0,375**

**E**




**0,125**

**F**




**0,52**

**G**




**0,2**

**H**




**0,40**

**I**




**0,600**

**J**




**0,8**

**K**




**0,12**

**L**




**0,24**

**M**




**0,05**

**N**




**0,01**

**O**




**0,005**

**P**




**0,0025**

**Q**



**0,00**

**R**



**5 : 100**