



Sous chaque grille figure un nombre. Ecris-le sous la forme d'une fraction, puis colorie l'aire correspondante du quadrillage.

A



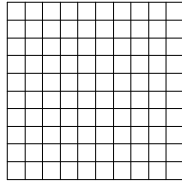
0,35

B



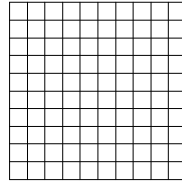
0,18

C



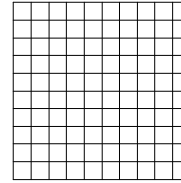
0,5

D




0,90

E




0,05

F




0,52

G



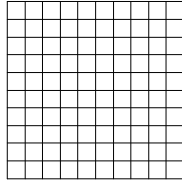
0,7

H



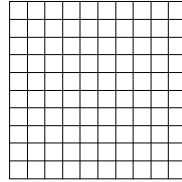
0,1

I




0,07

J




0,10

K




0,050

L




0,020

M




0,01

N




0,15

O




0,250

P




0,11

Q



1,0

R



0,99


Sous chaque grille figure un nombre. Ecris-le sous la forme d'une fraction, puis colorie l'aire correspondante du quadrillage.

A




0,35

B




0,18

C




0,5

D




0,90

E




0,05

F




0,52

G




0,7

H




0,1

I




0,07

J




0,10

K




0,050

L




0,020

M




0,01

N




0,15

O




0,250

P




0,11

Q



1,0

R



0,99